

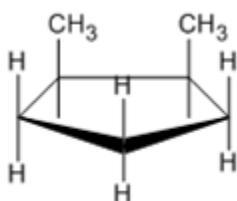
CONCEPT: TEST 1: PLANE OF SYMMETRY

As previously stated, if a molecule has an internal line of symmetry, it is _____

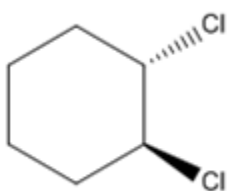
☐ This test is the most useful for _____

EXAMPLE: Are the following molecules chiral or not?

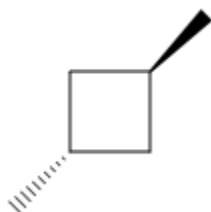
a.



b.



c.



d.

